

1. Use the picture below to answer the following question.



The picture shows the church of Hagia Sophia built by Emperor Justinian. This church is an architectural achievement of the—

- a) Byzantine Empire b) British Empire
c) Mongol Empire d) Mughal Empire

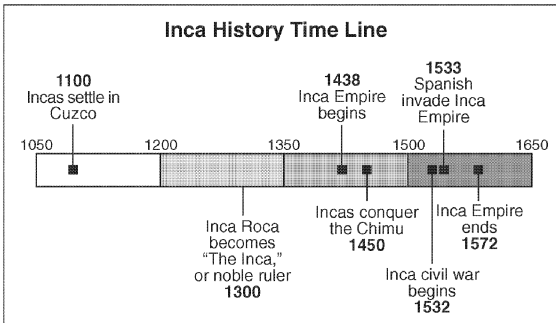
2. Read the newspaper article below.



The action described in the article is most directly related to which of the following goals of the United Nations?

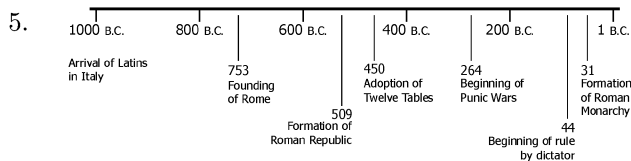
- a) to suppress acts of aggression
b) to develop diplomatic relations
c) to foster worldwide cooperation
d) to promote economic progress

3. Use the time line to answer the following question(s).



When did the Incas settle in Cuzco?

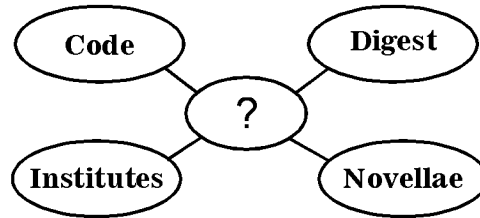
- a) 1050 b) 1100 c) 1438 d) 1650
4. According to the time line, approximately how many years did the Inca Empire last?
- a) 135 b) 500 c) 1572 d) 1650



How many years after the formation of the Roman Republic did Rome adopt the Twelve Tables?

- a) 41 years b) 59 years
c) 150 years d) 303 years

6.



Which of the following completes the diagram?

- a) Hammurabi's Code b) Justinian Code
c) Islamic Law d) Greek Guidelines
7. During the Enlightenment, ideas about government changed from—
- a) consent of the governed to absolute monarchies
b) divine right to the consent of the governed
c) absolute monarchies to dictatorships
d) Heliocentric theory to Geocentric theory
8. Historians use which of the following primary sources to interpret history?
- a) biography b) diary
c) history book d) internet

9. A primary source on the Holocaust is—
- a) an encyclopedia
b) the movie called Anne Frank
c) an editorial on historical accuracy
d) The Diary of Anne Frank

- | | |
|-----------|------------------|
| 1. | |
| Answer: | a |
| CodePath: | EAS.SS1.WH.25C.3 |
| 2. | |
| Answer: | a |
| CodePath: | EAS.SS1.WH.25C.5 |
| 3. | |
| Answer: | b |
| CodePath: | EAS.SS1.WH.26C.1 |
| 4. | |
| Answer: | a |
| CodePath: | EAS.SS1.WH.26C.2 |
| 5. | |
| Answer: | b |
| CodePath: | EAS.SS1.WH.26C.3 |
| 6. | |
| CodePath: | EAS.SS1.WH.18A.2 |
| 7. | |
| Answer: | b |
| CodePath: | EAS.SS1.WH.18A.5 |
| 8. | |
| Answer: | b |
| CodePath: | EAS.SS1.WH.25D.1 |
| 9. | |
| Answer: | d |
| CodePath: | EAS.SS1.WH.25D.4 |